

Pour la figure de cette page et les cinq figures de la page suivante, trouve si elles ont un ou plusieurs axe(s) de symétrie et, dans ce cas, trace-le[s].

Figure 1

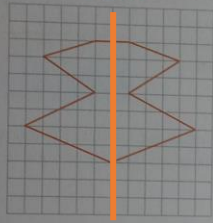


Figure 2

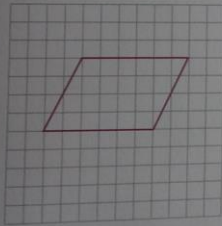


Figure 3

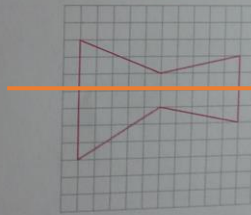


Figure 4

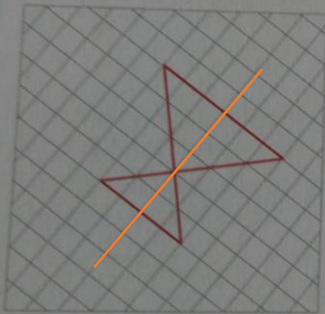


Figure 5

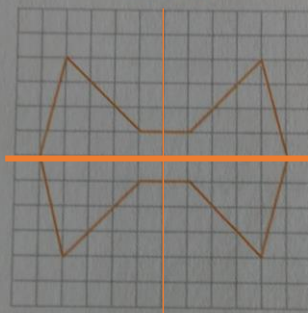


Figure 6

