



La multiplication en ligne (2)

1 Quel est le nombre total de cubes ? Complète.



3 fois 132, c'est 3 fois 100 plus 3 fois 30 plus 3 fois 2.

132×3

$$100 \times 3 + 30 \times 3 + 2 \times 3$$

$$300 + 90 + 6$$

$$396$$

nombre total de cubes : 396

2 Observe l'exemple. Décompose l'écriture des multiplications.

* $364 \times 2 = 300 \times 2 + 60 \times 2 + 4 \times 2$

$235 \times 4 = 200 \times 4 + 30 \times 4 + 5 \times 4$

$315 \times 3 = 300 \times 3 + 10 \times 3 + 5 \times 3$



3 Calcule.

* 23×4

$$20 \times 4 = 80$$

$$3 \times 4 = 12$$

$$23 \times 4 = 80 + 12$$

$$23 \times 4 = 92$$

125×3

$$100 \times 3 = 300$$

$$20 \times 3 = 60$$

$$5 \times 3 = 15$$

$$125 \times 3 = 300 + 60 + 15$$

$$125 \times 3 = 375$$

4 Calcule.

* 25×6

$$20 \times 6 = 120$$

$$5 \times 6 = 30$$

$$25 \times 6 = 150$$

36×4

$$30 \times 4 = 120$$

$$6 \times 4 = 24$$

$$36 \times 4 = 144$$

63×3


$$60 \times 3 = 180$$

$$3 \times 3 = 9$$

$$63 \times 3 = 189$$

c	d	u						
①	①			①		0	7	
5	2	8		4	6	9	12	
+	1	8	5	+	8	6	8	
+		4	3	+	3	7		
<hr/>				<hr/>				<hr/>
7	5	6		1	6	9		
							5	
							8	

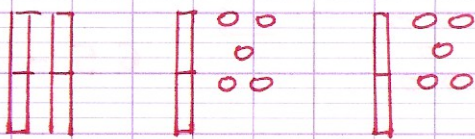
n° 85:



$$20 \times 4 = 80$$

Il a acheté 80 graines.

n° 86:



$$20 + 15 + 15 = 50$$

Il a acheté 50 pots.